

Asha Students Achievement Test 2017 – 18

Student Name		Class	4
School Name		Date	

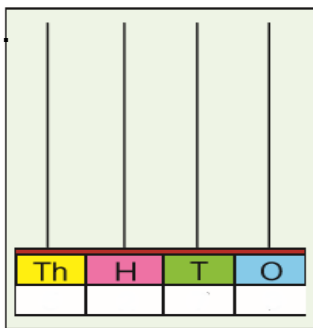
1. Draw a rectangle. Find the number of corners and sides.

Rectangle:

Number of corners _____

Number of sides _____

2. Read the number and draw beads in the Abacus. Then write the number name:



5096

Number name _____

3. Write the numbers in ascending and descending order.

6450, 2645, 8631, 1368

Ascending order: _____

Descending order: _____

4. Fill in the circle.

$$\textcircled{8679} = \textcircled{\quad} + \textcircled{600} + \textcircled{\quad} + \textcircled{9}$$

5. Write the place value of the circled digit:

4 $\textcircled{9}$ 3 8 _____

6. Find out odd and even numbers among the given numbers:

468, 687, 362, 563, 200, 369

Odd numbers _____

Even numbers _____

7. Add:

$$\begin{array}{rcccc} & 4 & 6 & 8 & 9 \\ & 3 & 6 & 5 & 4 \\ + & 1 & 3 & 4 & 2 \\ \hline & & & & \\ \hline \end{array}$$

8. In a shop there are 526 pencils. 113 pencils were sold. How many pencils were left in the shop?

9. Fill in the blanks:

i) $127 + \underline{\quad} = 127$

ii) $21 = 13 + \underline{\quad}$

iii) $8 \times \underline{\quad} = 56$

iv) $50 + 40 = \underline{\quad}$

v) $400 + 6000 = \underline{\quad}$

vi) $500 - 200 = \underline{\quad}$

vii) $30 \times 4 = \underline{\quad}$

viii) $15 \div 3 = \underline{\quad}$

10. Draw hands in the clock for given time.



8. 35


11.

7 $\overline{) 917}$


12. 506 × 8

13. A page has 54 lines. How many lines are there in 23 pages?

14. Shade $\frac{3}{4}$ of the following figure.



15. Look at the picture and find the length of the pencil.



Pencil length _____ cm